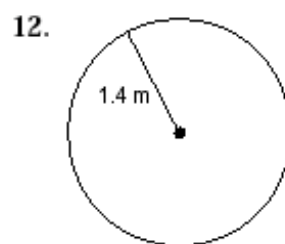
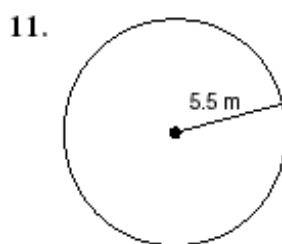
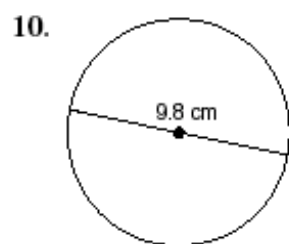
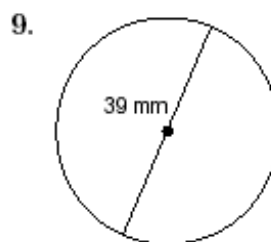
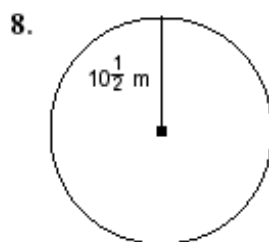
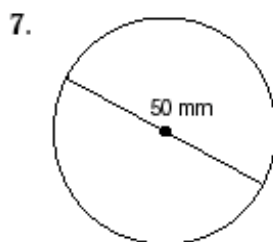
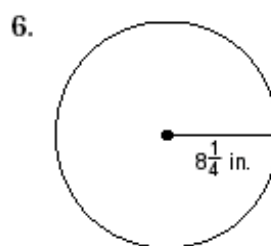
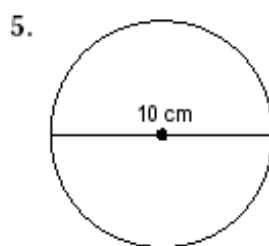
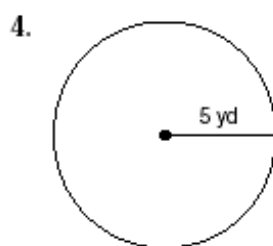
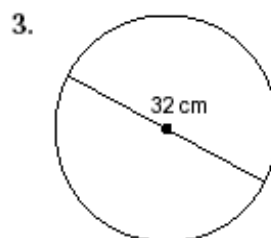
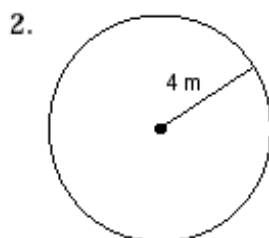
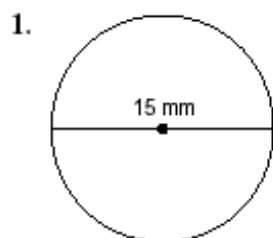


**12-2 Practice**  
Area: CirclesStudent Edition  
Pages 619–622*Find the area of each circle. Round to the nearest tenth.*

13. radius, 4.9 cm

14. diameter, 7 km

15. radius,  $2\frac{1}{2}$  ft

16. diameter, 4.2 mm

17. radius, 5 yd

18. diameter,  $8\frac{1}{2}$  in.